


Name: _____

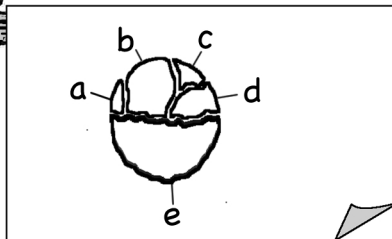
1. I found a huge potato chip. It weighs 4 grams!



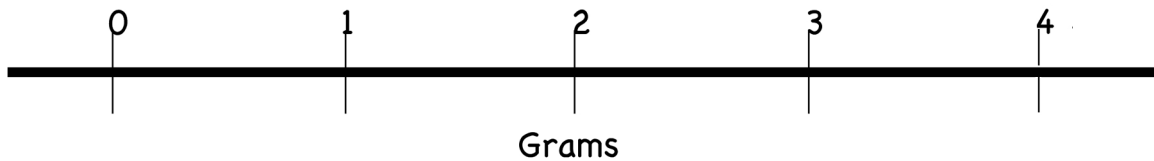
2. WHOOPS!
Dropped it!



3. Well I saved all of the pieces



Show where you think each of the 5 pieces of the potato chip would go on the gram weight line below.



If you put all of the broken pieces on a balance scale, how many grams would it weigh? _____ Grams