


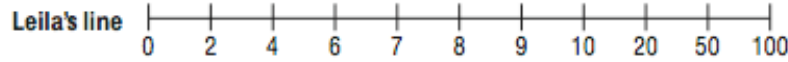
Date: _____

Which weight line?


Darwin has four dog biscuits. They are all the same size, but they have different weights: 5 grams, 10 grams, 20 grams, and 100 grams. Darwin wants to arrange the biscuits on a weight line so he can see how much more one biscuit weighs than another.



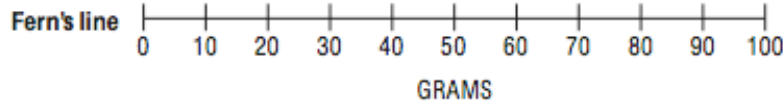
Try this line!



You can use this line!



Here's my line.



Check this one out.

